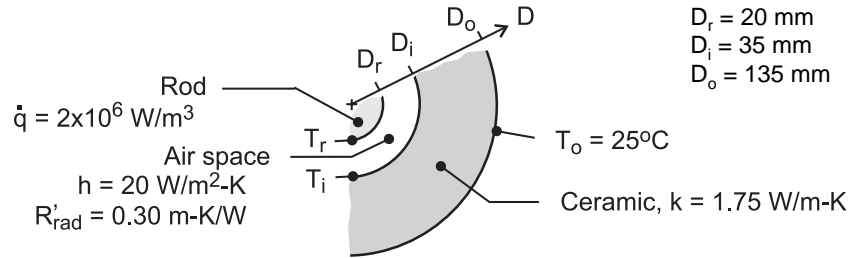


PROBLEM 3.55

KNOWN: Long rod experiencing uniform volumetric generation of thermal energy, \dot{q} , concentric with a hollow ceramic cylinder creating an enclosure filled with air. Thermal resistance per unit length due to radiation exchange between enclosure surfaces is R'_{rad} . The free convection coefficient for the enclosure surfaces is $h = 20 \text{ W/m}^2 \cdot \text{K}$.

FIND: (a) Thermal circuit of the system that can be used to calculate the surface temperature of the rod, T_r ; label all temperatures, heat rates and thermal resistances; evaluate the thermal resistances; and (b) Calculate the surface temperature of the rod.

SCHEMATIC:



ASSUMPTIONS: (1) Steady-state conditions, (2) One-dimensional, radial conduction through the hollow cylinder, (3) The enclosure surfaces experience free convection and radiation exchange.

ANALYSIS: (a) The thermal circuit is shown below. Note labels for the temperatures, thermal resistances and the relevant heat fluxes.

Enclosure, radiation exchange (given):

$$R'_{\text{rad}} = 0.30 \text{ m} \cdot \text{K} / \text{W}$$

Enclosure, free convection:

$$R'_{\text{cv,rod}} = \frac{1}{h\pi D_r} = \frac{1}{20 \text{ W/m}^2 \cdot \text{K} \times \pi \times 0.020 \text{ m}} = 0.80 \text{ m} \cdot \text{K} / \text{W}$$

$$R'_{\text{cv,cer}} = \frac{1}{h\pi D_i} = \frac{1}{20 \text{ W/m}^2 \cdot \text{K} \times \pi \times 0.035 \text{ m}} = 0.4547 \text{ m} \cdot \text{K} / \text{W}$$

Ceramic cylinder, conduction:

$$R'_{\text{cd}} = \frac{\ln(D_o/D_i)}{2\pi k} = \frac{\ln(0.135/0.035)}{2\pi \times 1.75 \text{ W/m} \cdot \text{K}} = 0.122 \text{ m} \cdot \text{K} / \text{W}$$

The thermal resistance between the enclosure surfaces (r-i) due to convection and radiation exchange is

$$\frac{1}{R'_{\text{enc}}} = \frac{1}{R'_{\text{rad}}} + \frac{1}{R'_{\text{cv,rod}} + R'_{\text{cv,cer}}}$$

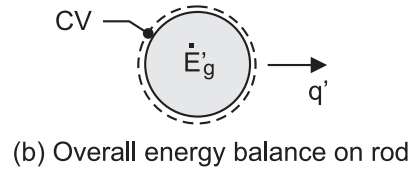
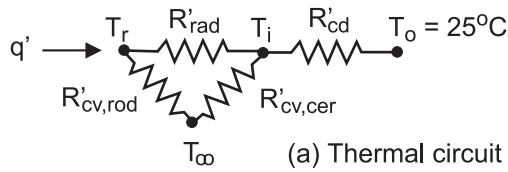
$$R'_{\text{enc}} = \left[\frac{1}{0.30} + \frac{1}{0.80 + 0.4547} \right]^{-1} \text{ m} \cdot \text{K} / \text{W} = 0.242 \text{ m} \cdot \text{K} / \text{W}$$

The total resistance between the rod surface (r) and the outer surface of the cylinder (o) is

$$R'_{\text{tot}} = R'_{\text{enc}} + R'_{\text{cd}} = (0.242 + 0.123) \text{ m} \cdot \text{K} / \text{W} = 0.365 \text{ m} \cdot \text{K} / \text{W}$$

Continued ...

PROBLEM 3.55 (Cont.)



(b) From an energy balance on the rod (see schematic) find T_r .

$$\dot{E}'_{\text{in}} - \dot{E}'_{\text{out}} + \dot{E}'_{\text{gen}} = 0$$

$$-q + \dot{q} \forall = 0$$

$$-(T_r - T_i) / R'_{\text{tot}} + \dot{q} (\pi D_r^2 / 4) = 0$$

$$-(T_r - 25) \text{ K} / 0.365 \text{ m} \cdot \text{K} / \text{W} + 2 \times 10^6 \text{ W} / \text{m}^3 \left(\pi \times 0.020 \text{ m}^2 / 4 \right) = 0$$

$$T_r = 253^\circ\text{C}$$

<

COMMENTS: In evaluating the convection resistance of the air space, it was necessary to define an average air temperature (T_∞) and consider the convection coefficients for each of the space surfaces. As you'll learn later in Chapter 9, correlations are available for directly estimating the convection coefficient (h_{enc}) for the enclosure so that $q_{\text{cv}} = h_{\text{enc}} (T_r - T_i)$.