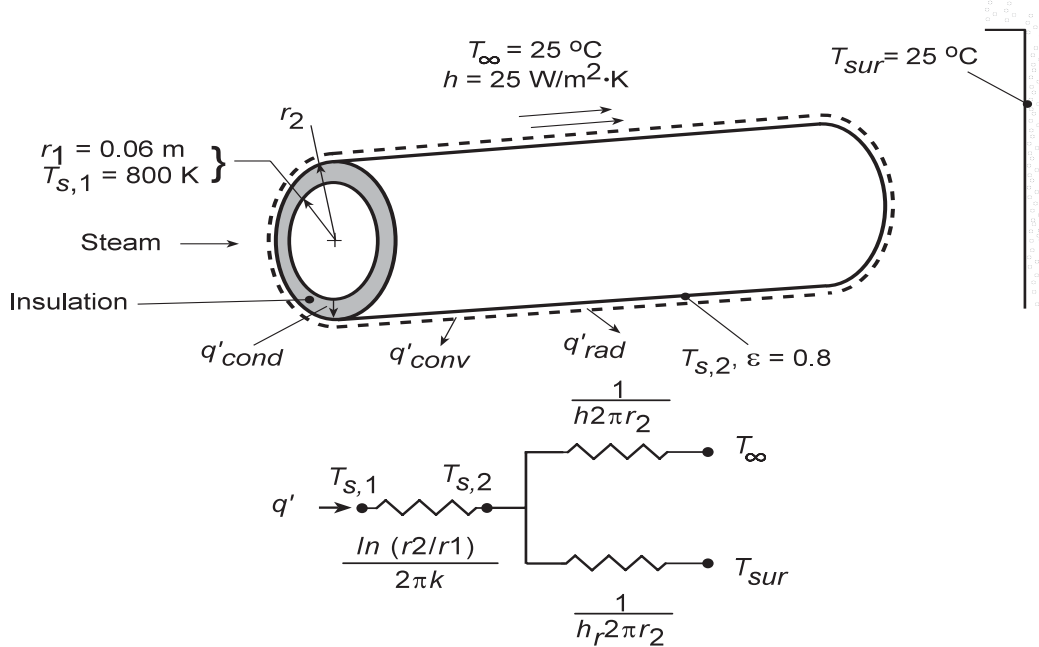


PROBLEM 3.45

KNOWN: Thickness and inner surface temperature of calcium silicate insulation on a steam pipe. Convection and radiation conditions at outer surface.

FIND: (a) Heat loss per unit pipe length for prescribed insulation thickness and outer surface temperature. (b) Heat loss and radial temperature distribution as a function of insulation thickness.

SCHEMATIC:



ASSUMPTIONS: (1) Steady-state conditions, (2) One-dimensional conduction, (3) Constant properties.

PROPERTIES: Table A-3, Calcium Silicate ($T = 645 \text{ K}$): $k = 0.089 \text{ W/m}\cdot\text{K}$.

ANALYSIS: (a) From Eq. 3.32 with $T_{s,2} = 490 \text{ K}$, the heat rate per unit length is

$$q' = q_r/L = \frac{2\pi k (T_{s,1} - T_{s,2})}{\ln(r_2/r_1)}$$

$$q' = \frac{2\pi (0.089 \text{ W/m}\cdot\text{K})(800 - 490) \text{ K}}{\ln(0.08 \text{ m}/0.06 \text{ m})}$$

$$q' = 603 \text{ W/m}.$$

(b) Performing an energy for a control surface around the outer surface of the insulation, it follows that

$$q'_{\text{cond}} = q'_{\text{conv}} + q'_{\text{rad}}$$

$$\frac{T_{s,1} - T_{s,2}}{\ln(r_2/r_1)/2\pi k} = \frac{T_{s,2} - T_{\infty}}{1/(2\pi r_2 h)} + \frac{T_{s,2} - T_{\text{sur}}}{1/(2\pi r_2 h_r)}$$

where $h_r = \varepsilon \sigma (T_{s,2} + T_{\text{sur}}) (T_{s,2}^2 + T_{\text{sur}}^2)$. Solving this equation for $T_{s,2}$, the heat rate may be determined from

$$q' = 2\pi r_2 \left[h (T_{s,2} - T_{\infty}) + h_r (T_{s,2} - T_{\text{sur}}) \right]$$

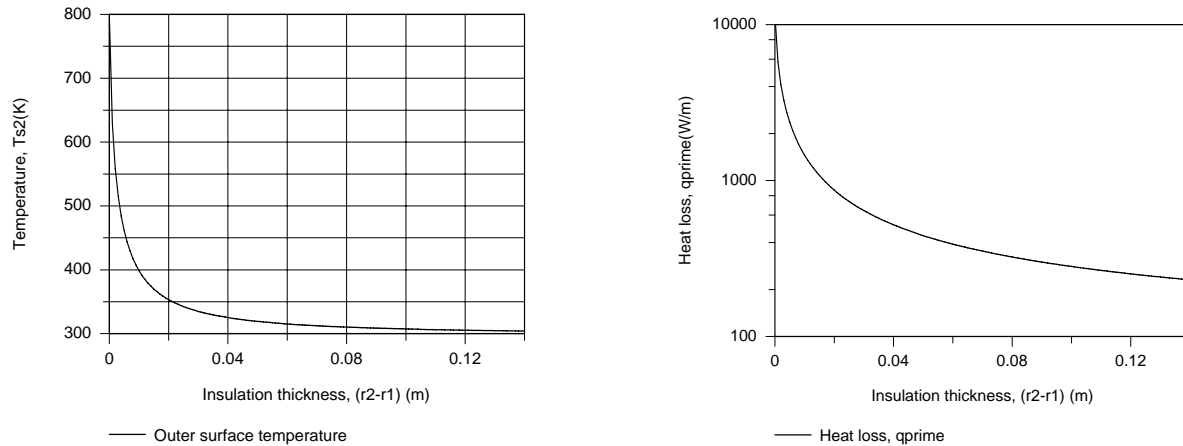
Continued...

PROBLEM 3.45 (Cont.)

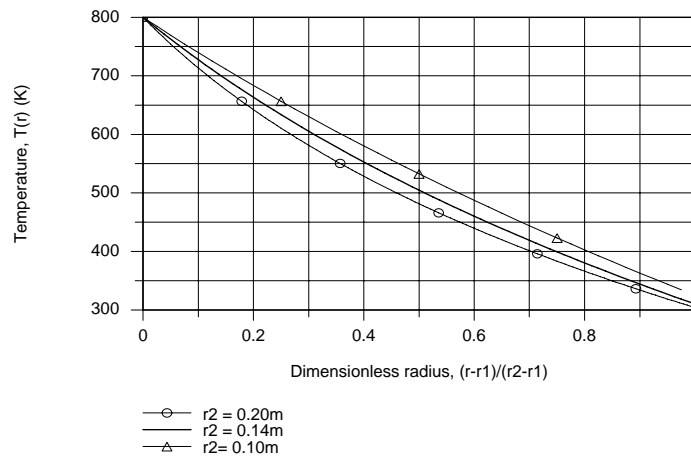
and from Eq. 3.31 the temperature distribution is

$$T(r) = \frac{T_{s,1} - T_{s,2}}{\ln(r_1/r_2)} \ln\left(\frac{r}{r_2}\right) + T_{s,2}$$

As shown below, the outer surface temperature of the insulation $T_{s,2}$ and the heat loss q' decay precipitously with increasing insulation thickness from values of $T_{s,2} = T_{s,1} = 800$ K and $q' = 11,600$ W/m, respectively, at $r_2 = r_1$ (no insulation).



When plotted as a function of a dimensionless radius, $(r - r_1)/(r_2 - r_1)$, the temperature decay becomes more pronounced with increasing r_2 .



Note that $T(r_2) = T_{s,2}$ increases with decreasing r_2 and a linear temperature distribution is approached as r_2 approaches r_1 .

COMMENTS: An insulation layer thickness of 20 mm is sufficient to maintain the outer surface temperature and heat rate below 350 K and 1000 W/m, respectively.