

PROBLEM 4.6

KNOWN: Uniform media of prescribed geometry.

FIND: (a) Shape factor expressions from thermal resistance relations for the plane wall, cylindrical shell and spherical shell, (b) Shape factor expression for the isothermal sphere of diameter D buried in an infinite medium.

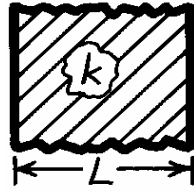
ASSUMPTIONS: (1) Steady-state conditions, (2) Uniform properties.

ANALYSIS: (a) The relationship between the shape factor and thermal resistance of a shape follows from their definitions in terms of heat rates and overall temperature differences.

$$q = kS\Delta T \quad (4.20), \quad q = \frac{\Delta T}{R_t} \quad (3.19), \quad S = 1/kR_t \quad (4.21)$$

Using the thermal resistance relations developed in Chapter 3, their corresponding shape factors are:

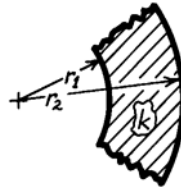
Plane wall:



$$R_t = \frac{L}{kA} \quad S = \frac{A}{L} \quad <$$

Cylindrical shell:

(L into the page)



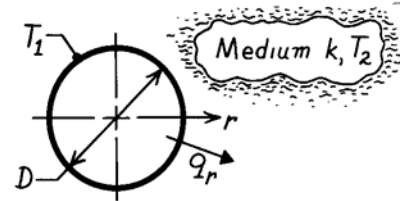
$$R_t = \frac{\ln(r_2/r_1)}{2\pi Lk} \quad S = \frac{2\pi L}{\ln r_2/r_1} \quad <$$

Spherical shell:

$$R_t = \frac{1}{4\pi k} \left[\frac{1}{r_1} - \frac{1}{r_2} \right] \quad S = \frac{4\pi}{1/r_1 - 1/r_2} \quad <$$

(b) The shape factor for the sphere of diameter D in an infinite medium can be derived using the alternative conduction analysis of Section 3.2. For this situation, q_r is a constant and Fourier's law has the form

$$q_r = -k \left(4\pi r^2 \right) \frac{dT}{dr}.$$



Separate variables, identify limits and integrate.

$$-\frac{q_r}{4\pi k} \int_{D/2}^{\infty} \frac{dr}{r^2} = \int_{T_1}^{T_2} dT \quad -\frac{q_r}{4\pi k} \left[-\frac{1}{r} \right]_{D/2}^{\infty} = -\frac{q_r}{4\pi k} \left[0 - \frac{2}{D} \right] = (T_2 - T_1)$$

$$q_r = 4\pi k \left[\frac{D}{2} \right] (T_1 - T_2) \quad \text{or} \quad S = 2\pi D. \quad <$$

COMMENTS: Note that the result for the buried sphere, $S = 2\pi D$, can be obtained from the expression for the spherical shell with $r_2 = \infty$. Also, the shape factor expression for the “isothermal sphere buried in a semi-infinite medium” presented in Table 4.1 provides the same result with $z \rightarrow \infty$.