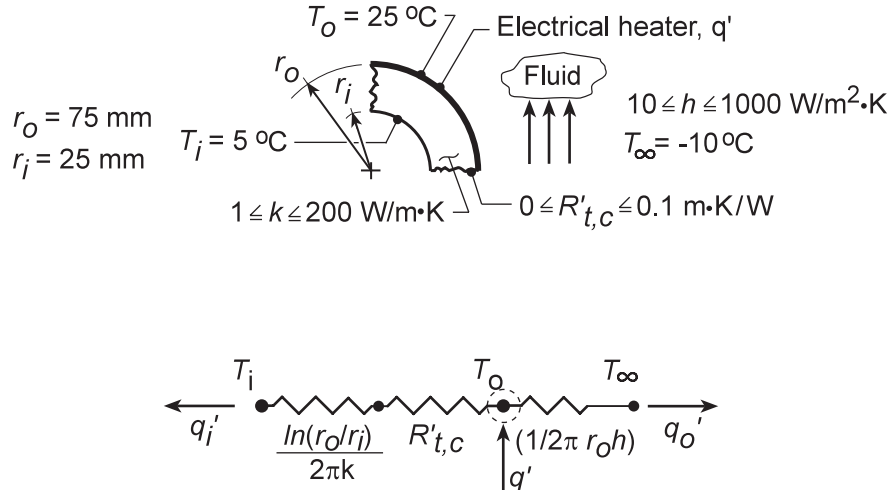


PROBLEM 3.49

KNOWN: Inner and outer radii of a tube wall which is heated electrically at its outer surface. Inner and outer wall temperatures. Temperature of fluid adjoining outer wall.

FIND: Effect of wall thermal conductivity, thermal contact resistance, and convection coefficient on total heater power and heat rates to outer fluid and inner surface.

SCHEMATIC:



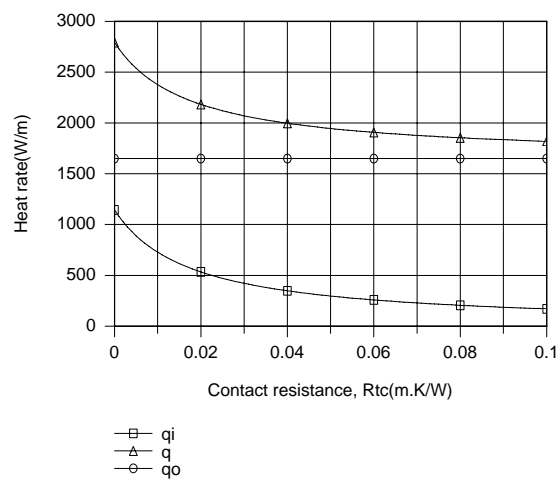
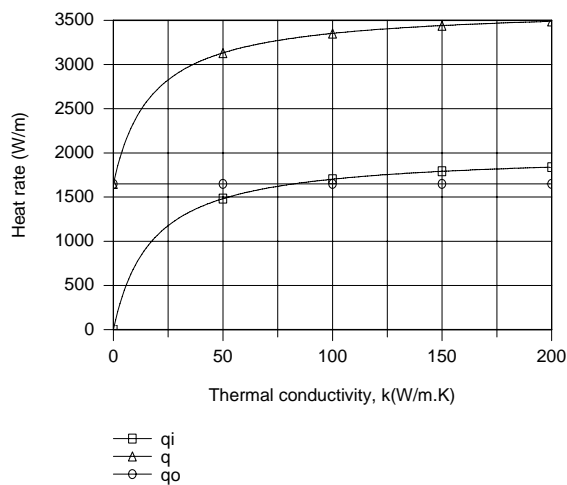
ASSUMPTIONS: (1) Steady-state conditions, (2) One-dimensional conduction, (3) Constant properties, (4) Negligible temperature drop across heater, (5) Negligible radiation.

ANALYSIS: Applying an energy balance to a control surface about the heater,

$$q' = q'_i + q'_o$$

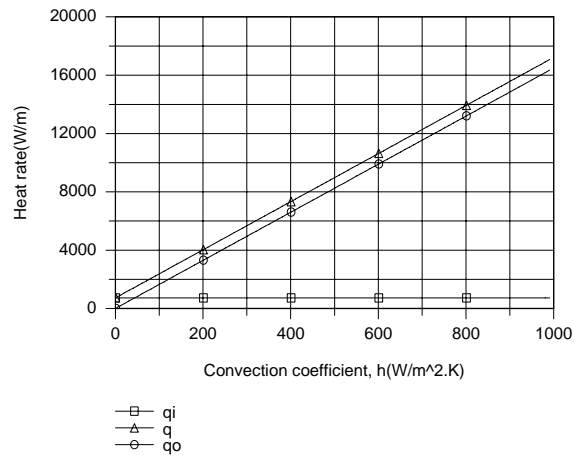
$$q' = \frac{T_o - T_i}{\frac{\ln(r_o/r_i)}{2\pi k} + R'_{t,c}} + \frac{T_o - T_\infty}{(1/2\pi r_o h)}$$

Selecting nominal values of $k = 10 \text{ W/m}\cdot\text{K}$, $R'_{t,c} = 0.01 \text{ m}\cdot\text{K/W}$ and $h = 100 \text{ W/m}^2\cdot\text{K}$, the following parametric variations are obtained



Continued...

PROBLEM 3.49 (Cont.)



For a prescribed value of h , q'_O is fixed, while q'_i , and hence q' , increase and decrease, respectively, with increasing k and $R'_{t,c}$. These trends are attributable to the effects of k and $R'_{t,c}$ on the total (conduction plus contact) resistance separating the heater from the inner surface. For fixed k and $R'_{t,c}$, q'_i is fixed, while q'_O , and hence q' , increase with increasing h due to a reduction in the convection resistance.

COMMENTS: For the prescribed nominal values of k , $R'_{t,c}$ and h , the electric power requirement is $q' = 2377$ W/m. To maintain the prescribed heater temperature, q' would increase with any changes which reduce the conduction, contact and/or convection resistances.